



3. Swiss Finals

18 November 2017

Multimedia Test

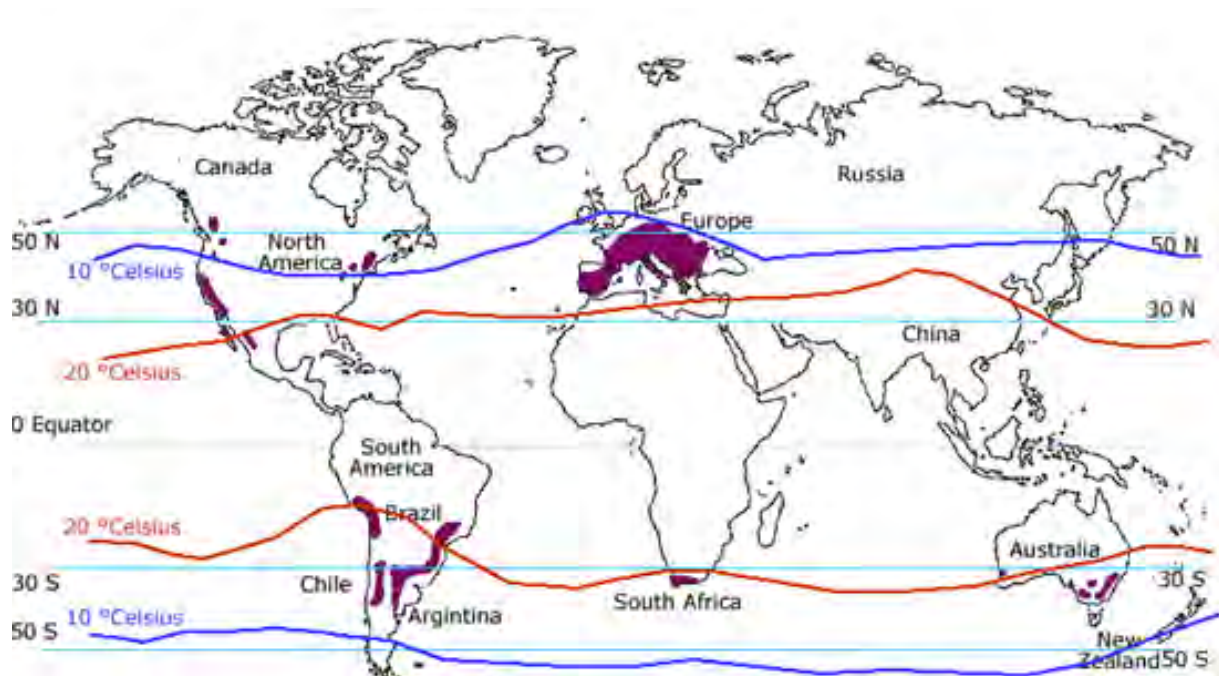
Questions Booklet

- Do NOT open the booklet before instructed to do so by a supervisor.
- Write your answer on the separate **Answer Sheet**.
- Only the answer sheet will be marked.
- Give only ONE answer to each question.

Question 1

What agricultural product is being produced in the highlighted regions?

- a) oranges
- b) kiwi fruit
- c) grapes**
- d) apples



<https://tinyurl.com/y99ohhm5>

Question 2

The coloured lakes in this picture are a result of different algae species.

What is the reason for the white coloured lakes?

- a) ice
- b) algae
- c) limescale
- d) salt



Beaumont, Australia

<https://tinyurl.com/ycs3g7gl>

Question 3

This map shows the countries' size dependent on their contribution to a specific topic.

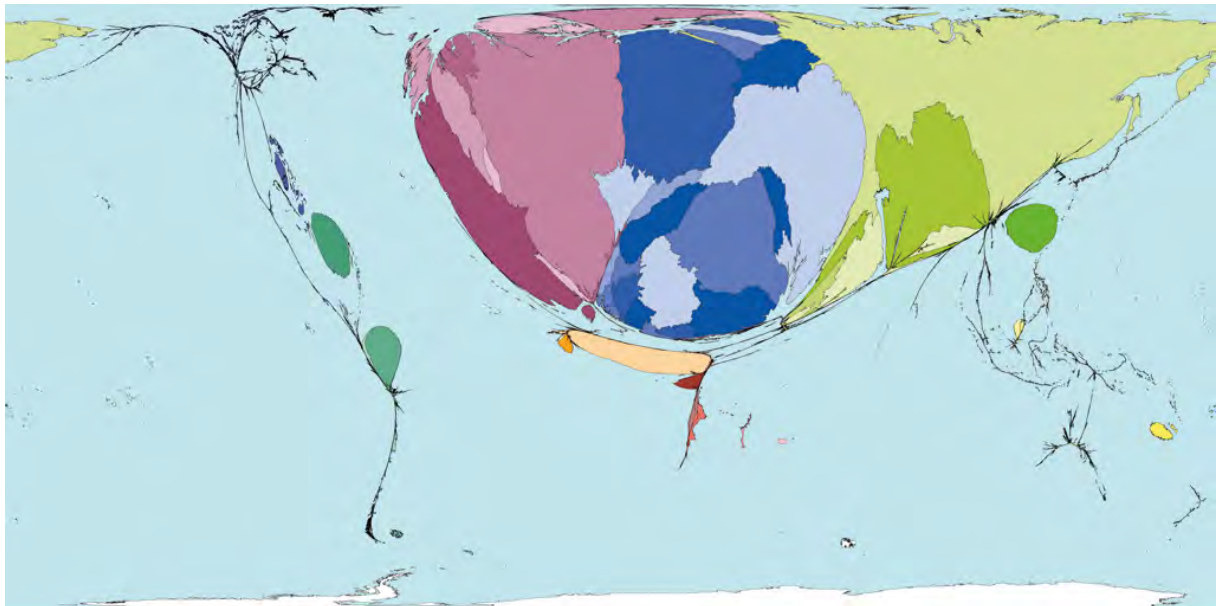
What is the topic of this map?

a) carbondioxide emissions decrease (1980-2000)

b) incoming refugees (1980-2000)

c) nuclear power plants (1980-2000)

d) use of pesticides (1980-2000)




<https://tinyurl.com/dbhbmc>

Question 4

What cloud is shown in this picture

- a) Stratocumulus stratiformis
- b) Cirrus floccus
- c) Altocirrus undulatus
- d) **Alto cumulus lenticularis**



<http://scheidegger-fotografie.ch/galerie.php?katID=26&page=4>

Question 5

Each circle in this graphic represents a country. The colours represent continents.

What continent is represented by the colour blue?

- a) Asia
- b) Africa**
- c) Oceania
- d) Latin America



<https://www.gapminder.org/>

Question 6

This aerial picture shows glasshouses. It was take in which European region?

- a) Belgium
- b) South Spain**
- c) Hungaria
- d) Ukraine

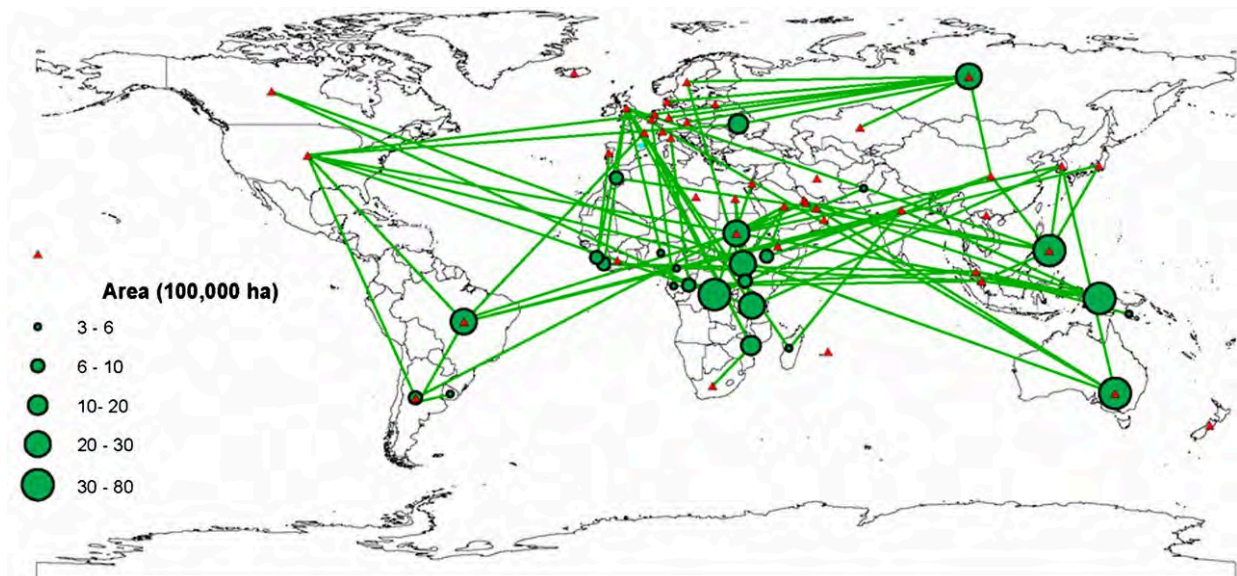


<https://tinyurl.com/ycs3g7gl>

Question 7

What is the relationship (green lines) between the shown countries?

- a) land acquisitions
- b) investments in reforestation projects
- c) exports of agricultural products
- d) treaties for mineral trade



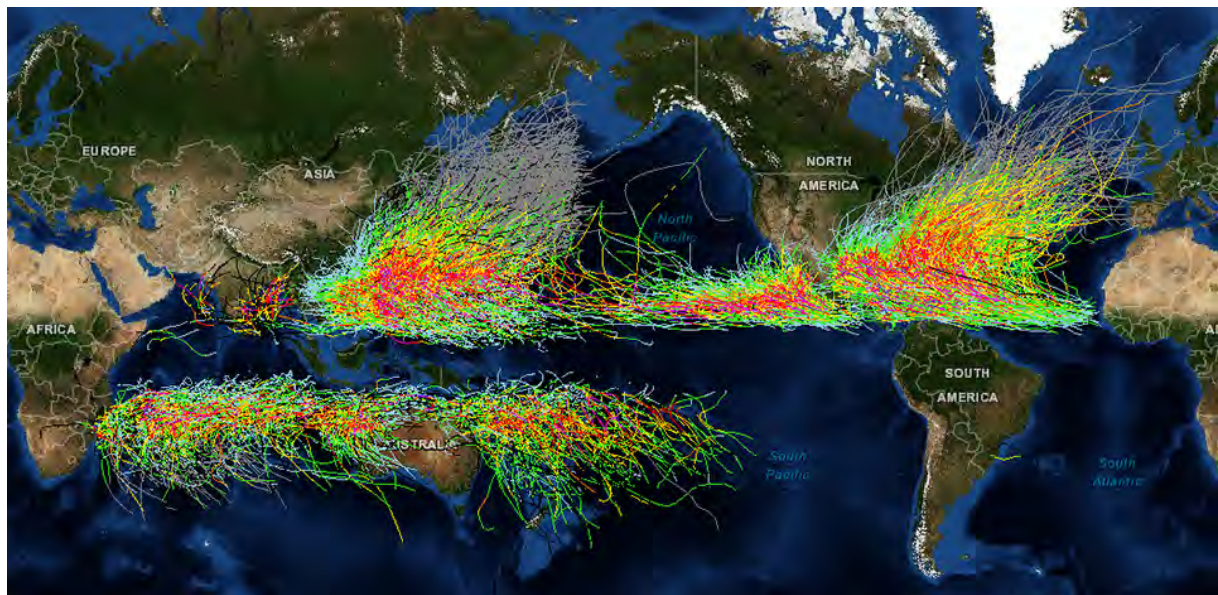
<http://www.pnas.org/content/110/3/892/F1.large.jpg>

Question 8

The map shows the paths of major tropical cyclones.

Why are the inner tropics free of these natural hazards?

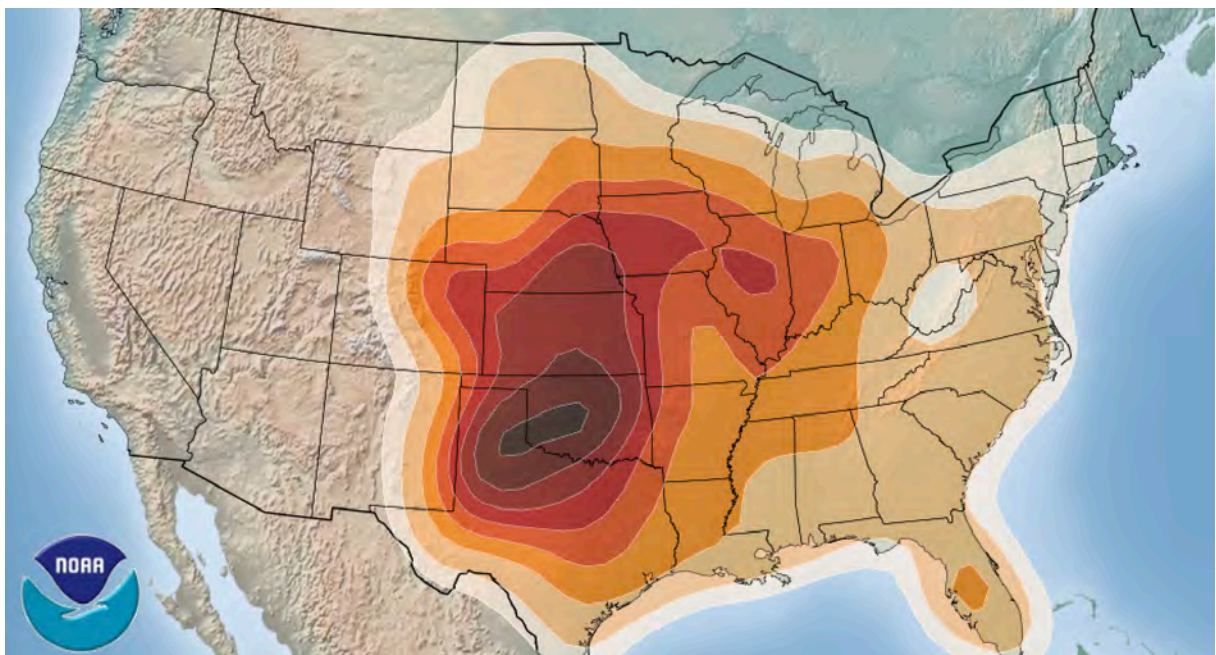
- a) sea water too warm
- b) coriolis effect too weak**
- c) no ITC during the year
- d) too little drifting winds



Question 9

What is shown on this map?

- a) ash deposition after eruption of the Yellowstone supervulcanoe
- b) earthquake magnitude from a specific earthquake
- c) tornado propability**
- d) amount of precipitation during a specific event



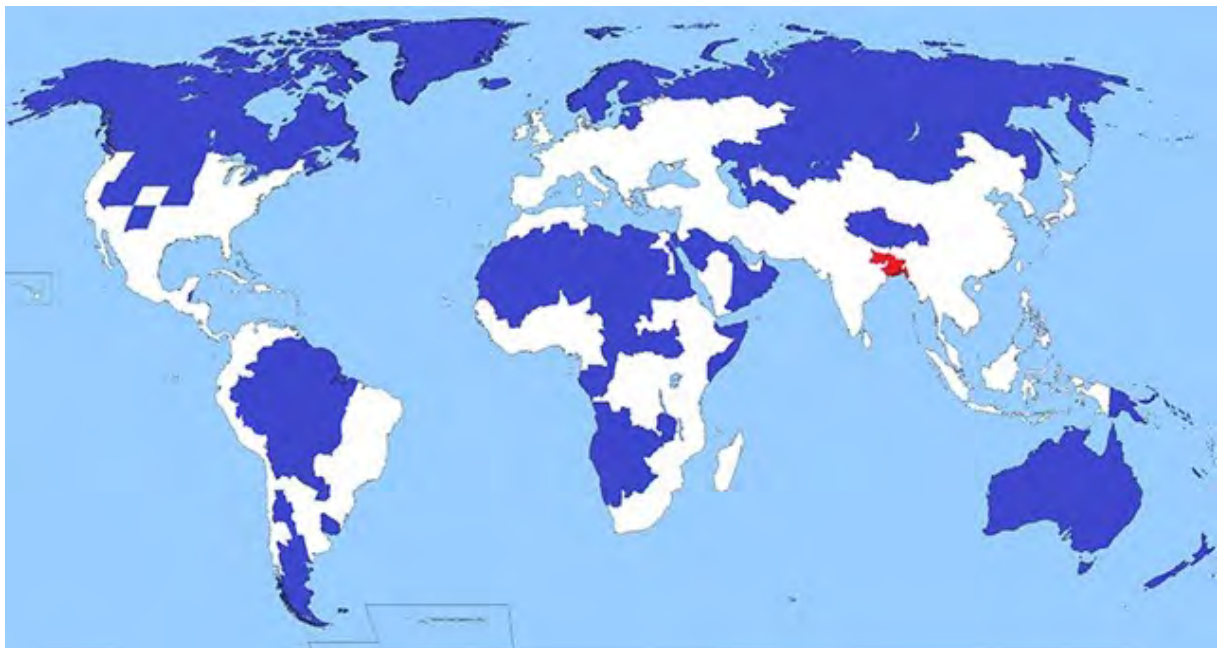
<https://tinyurl.com/ybtp283>

Question 10

The population of the red highlighted region makes 5% of the world's total population.

What percentage of the world's total population live in the blue highlighted regions?

- a) 1%
- b) 5%**
- c) 10%
- d) 15%



<https://tinyurl.com/y84ywazu>